



KNEUS SCHOLASTIC APTITUDE TEST (KSAT - II)

Syllabus

and

Sample Questions

With a Model Question Paper

CLASS - I

KNEUS SCHOLASTIC APTITUDE TEST

Students kindly go through the syllabus given and prepare accordingly.

The questions given in this booklet are sample questions. These questions need not appear in the test.

The answer key is given at the end

Both Part A and B are to be attempted compulsorily

PART A (OBJECTIVE TYPE)

ENGLISH

SYLLABUS

- 1 Alphabets A a – Z z (Print and Cursive)
- 2 Vowels.
- 3 'A' and 'An'.
- 4 'This' and 'that'.
- 5 'These' and 'those'.
- 6 'He' and 'she'.
- 7 'His' and 'her'.
- 8 Use of 'I' and 'am'.
- 9 Use of 'is' and 'are'.
- 10 One and many.
- 11 'In' 'on' and 'under'.
- 12 Action words.
- 13 Pair making.
- 14 Opposites .
- 15 Rhyming words.

1. The plural of camel can be made by adding

- | | | | |
|------------------------------|---|------------------------------|---|
| (a) <input type="checkbox"/> | E | (b) <input type="checkbox"/> | Z |
| (c) <input type="checkbox"/> | S | (d) <input type="checkbox"/> | X |

2. Choose the correct rhyming word. Sam likes to play all _____

- | | | | |
|------------------------------|-----|------------------------------|-----|
| (a) <input type="checkbox"/> | Lay | (b) <input type="checkbox"/> | Pay |
| (c) <input type="checkbox"/> | day | (d) <input type="checkbox"/> | way |

3. Not happy means

- | | | | |
|------------------------------|-----|------------------------------|------|
| (a) <input type="checkbox"/> | Sad | (b) <input type="checkbox"/> | glad |
| (c) <input type="checkbox"/> | big | (d) <input type="checkbox"/> | fast |

4. Do you _____ football.

(a) Eat

(b) play

(c) study

(d) drink

5. The rabbit is _____ the table

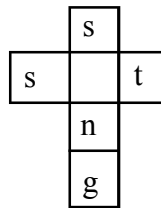
(a) on

(b) in

(c) is

(d) under

6. Fill in the correct vowel to complete the puzzle. (Both across and downward)



(a) i

(b) e

(c) a

(d) o

7. There are 7 _____ in a week.

(a) minutes

(b) days

(c) hours

(d) months

8. The gift is for you. It's not for _____

(a) me

(b) my

(c) I

(d) mine

9. I am round in shape. I keep on changing my shape. You can see me at night. I am

(a) Owl

(b) The Sun

(c) Ball

(d) The Moon

10. You eat lunch in the

(a) afternoon

(b) morning

(c) evening

(d) night

11. _____ are balls.

(a) this

(b) the

(c) these

(d) that

12. Tick the odd one out

(a) pond

(b) river

(c) well

(d) tap

13. Which word goes with article 'an'

(a) Sun

(b) Door

(c) Kite

(d) Apple

14. Complete the sequence with the correct letter

A C E G I K ____

(a) M

(b) L

(c) J

(d) N

15. Complete the word with the correct letters 'M ____ S T ____ R

(a) A & N

(b) O & L

(c) A & E

(d) U & A

16. Mom served the fish in the _____. Fill in the correct rhyming word.

(a) bowl

(b) dish

(c) lap

(d) plate

17. The opposite of TOP is

(a) fast

(b) behind

(c) bottom

(d) up

18. Make the pair : Table and

(a) candle

(b) mat

(c) stool

(d) chair

19. _____ is a kite.

(a) those

(b) an

(c) this

(d) these

20. Which word goes with the article 'a'

(a) tree

(b) orange

(c) umbrella

(d) egg

21. Which word has two vowels in it.

(a) duck

(b) table

(c) pond

(d) car

22. Tick the correct spelling

(a) gren

(b) grene

(c) green

(d) grean

23. What is the correct cursive form of the letter B

(a) p

(b) B

(c) d

(d) b

24. Count the number of vowels in the sentence

“ I am going to buy a pencil ”


(a) 10


(b) 9


(c) 7


(d) 5

25. Tick the picture which has ‘i’ sound in it

(a) 

(b) 

(c) 

(d) 

26. Tick the correct sentence

(a) tina is my, friend

(b) tina is, my Friend

(c) Tina is my friend.

(d) Tina. Is my friend

27. I am a band of seven colours. You can see me after the rain. I am a

(a) light

(b) rainbow

(c) sky

(d) candle

28. Not fast means

(a) thin

(b) fat

(c) dark

(d) slow

29. I _____ food .

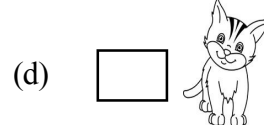

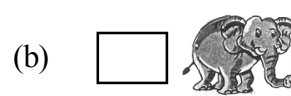
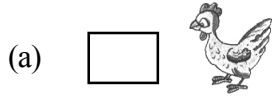
(a) eat

(b) sleep

(c) write

(d) run

30. Tick the picture which has a 'o' sound in it



31. _____ is my uncle.

(a) He

(b) She

(c) Her

(d) His

32. The plural of bird is

(a) birdz

(b) birdees

(c) budz

(d) birds

33. _____ grandfather is very old

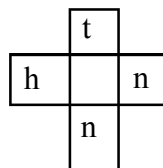
(a) He

(b) His

(c) Mine

(d) She

34. Find the correct vowel to complete the crossword. (Both across and downward)



(a) e

(b) u

(c) i

(d) a

35. The girl is 'FAT' and the boy is _____ (write the opposite)

(a) tall

(b) short

(c) sad

(d) thin

36. _____ is a good girl
- (a) he (b) his
(c) she (d) her
37. Tick the odd one out
- (a) gate (b) late
(c) book (d) date
38. Tick the correct spelling
- (a) rabit (b) rabbit
(c) rabbet (d) rabbit
39. Find the correct pair of LOCK and
- (a) door (b) window
(c) hammer (d) key
40. Complete the sequence with correct letter B D F H J _____
- (a) I (b) K
(c) L (d) M

ANSWER KEY

- | | | | | | | |
|-------|-------|-------|-------|-------|-------|-------|
| 1. c | 2. c | 3. a | 4. b | 5. d | 6. a | 7. b |
| 8. a | 9. d | 10. a | 11. c | 12. d | 13. d | 14. a |
| 15. c | 16. b | 17. c | 18. d | 19. c | 20. a | 21. b |
| 22. c | 23. b | 24. b | 25. b | 26. c | 27. b | 28. d |
| 29. a | 30. c | 31. a | 32. d | 33. b | 34. a | 35. d |
| 36. c | 37. c | 38. b | 39. d | 40. c | | |

MATHEMATICS

SYLLABUS

1. Counting 1 - 300.
2. Backward counting 200 - 1.
3. Number names 1 - 100.
4. Value of numbers 1 - 100.
5. Greater and smaller numbers.
6. Greatest and smallest numbers.
7. Missing numbers.
8. What comes 'Before', 'After' and 'Between'.
9. Cardinal and ordinal numbers.
10. Ascending and descending order of numbers .
11. Addition (double digit).
12. Subtraction (double digit).
13. Time.
14. Shapes.
16. Money.
17. Sequencing.

1. $80 + 8 = \underline{\hspace{2cm}}$. Find the sum

(a) 88

(b) 87

(c) 81

(d) 72

2. A square has sides.

(a) 5

(b) 6

(c) 4

(d) 3

3. 90 in figures is written as

(a) ninty

(b) ninety

(c) ninetey

(d) nineteen

4. $30 + 20 = \underline{\hspace{2cm}}$

(a) 50

(b) 10

(c) 40

(d) 70

5. _____ is the greatest number among the following

(a) 125

(b) 50

(c) 100

(d) 250

6. What comes before 69

(a) 80

(b) 60

(c) 70

(d) 68

7. Find the missing numbers. 29 31 33 ___ 37 ___

(a) 34 & 35

(b) 35 & 39

(c) 34 & 38

(d) 40 & 42

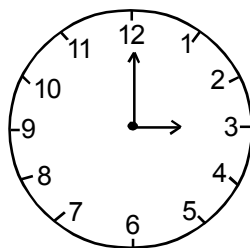
8. See the clock and tell the time:

(a) 12 O' Clock

(b) 2 O' Clock

(c) 3 O' Clock

(d) 9 O' Clock



9. _____ is the smallest number among the following

(a) 56

(b) 76

(c) 89

(d) 65

10. Complete the sequence 2, 4, 6, 8 _____

(a) 9

(b) 10

(c) 7

(d) 5

11. Which number comes before 135

(a) 136

(b) 137

(c) 133

(d) 134

12. 19 76 43 100 80 when put in ascending order will be

(a) 19 43 80 76 100

(b) 100 80 76 43 19

(c) 19 43 76 80 100

(d) 80 43 100 76 19

13. Tick the correct missing number. $30 + \underline{\quad} = 80$

(a) 20

(b) 50

(c) 10

(d) 80

14. I go to sleep at

(a) 5:30 AM

(b) 8:30 AM

(c) 12:00 AM

(d) 9:30 PM

15. How do you write seventy two in figures

(a) 72

(b) 70

(c) 75

(d) 80

16. Tick the correct option

(a) $53 = 57$

(b) $60 = 60$

(c) $64 = 48$

(d) $34 = 43$

17. Which number is greater than 53

(a) 50

(b) 47

(c) 78

(d) 13

18. Which number is smaller than 96

(a) 99

(b) 98

(c) 97

(d) 94

19. The sixth month of the year is

(a) February

(b) June

(c) July

(d) October

20. Find the correct sum

(a) $20 + 20 = 40$

(b) $10 + 5 = 14$

(c) $38 + 2 = 50$

(d) $9 + 1 = 11$

21. Find the next number. 50, 40, 30, 20, _____

(a) 60

(b) 25

(c) 10

(d) 0

22. 2 more than 9 = _____

(a) 7

(b) 5

(c) 11

(d) 10

23. There are 24 apples in a basket . 4 are taken away. How many are left ?

(a) 28

(b) 20

(c) 22

(d) 19

24. 45 43 33 70 12 when put in descending order will be

(a) 12 33 43 45 70

(b) 70 45 12 33 43

(c) 45 43 33 12 70

(d) 70 45 43 33 12

25. How many ones are there in 37

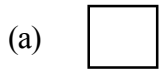
(a) 3

(b) 10

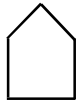
(c) 2

(d) 7

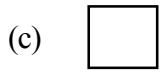
26. Which shape is this ?



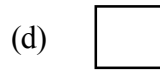
square



(b) cone

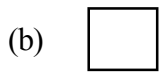
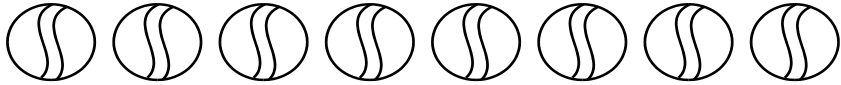
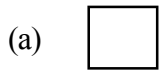


diamond



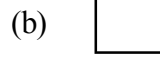


pentagon

27. Tick the box with the greater number of balls



28. Tick the tree which is tallest



29. Tick the box which has the least number of mangoes



30. $34 + 43 =$ _____



73



57



64



77

31. The smallest three digit number is

(a) 102

(b) 99

(c) 100

(d) 300

32. The biggest two digit number is

(a) 23

(b) 99

(c) 98

(d) 90

33. Tuesday is the _____ day of the week

(a) 2nd

(b) 3rd

(c) 7th

(d) 1st

34. Complete the sum . $63 = \underline{\quad} + 61$

(a) 2

(b) 3

(c) 60

(d) 1

35. Find the next figure 1 3 5 7 ___

(a) 1

(b) 6

(c) 8

(d) 9

36. 7 birds were sitting on a branch. 3 birds flew away. Now there are _____ birds

(a) 10

(b) 73

(c) 4

(d) 5

37. Tick the correct option

(a) $10-3 = 4$

(b) $10-3=7$

(c) $10-4 = 5$

(d) $10-5=8$

38. What comes after the number 63

(a) 64

(b) 65

(c) 62

(d) 60

39. Tick the correct option

(a) $56 = 54$

(b) $89 < 34$

(c) $10 > 14$

(d) $73 > 40$

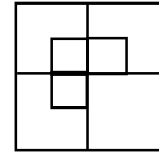
40. Count and tell the number of squares in the figure

(a) 8

(b) 4

(c) 20

(d) 12



41. Find the missing numbers. 45 ___ 47 ___ ___ 50 51

(a) 46 , 48 , 50

(b) 44 , 46 , 48

(c) 46 , 48 , 49

(d) 50 , 49 , 48

42. $13 + 12 =$

(a) 22

(b) 25

(c) 20

(d) 10

43. $63 - 12 =$ ___

(a) 51

(b) 50

(c) 60

(d) 40

44. Find the missing numbers. 100, 99, 98, 97, 96, 95 ___, ___.

(a) 49 & 48

(b) 94 & 93

(c) 100 & 91

(d) 93 & 92

45. 4 tens and 5 ones is

(a) 54

(b) 9

(c) 45

(d) 42

46. Find the next one : 10, 20, 30, ___

(a) 50

(b) 80

(c) 60

(d) 40

ANSWER KEY

1.	a	2.	c	3.	b	4.	a	5.	d	6.	d	7.	b
8.	c	9.	a	10.	b	11.	d	12.	c	13.	b	14.	d
15.	a	16.	b	17.	c	18.	d	19.	b	20.	a	21.	c
22.	c	23.	b	24.	d	25.	d	26.	d	27.	a	28.	b
29.	c	30.	d	31.	c	32.	b	33.	b	34.	a	35.	d
36.	c	37.	b	38.	a	39.	d	40.	a	41.	c	42.	b
43.	a	44.	b	45.	c	46.	d						

GENERAL KNOWLEDGE, SCIENCE AND SOCIAL STUDIES, HEALTH ISSUES

SYLLABUS

- 1 Parts of the body.
- 2 Family.
- 3 Colours.
- 4 Fruits.
- 5 Vegetables.
- 6 Flowers.
- 7 Domestic animals (babies , sounds and homes of animals).
- 8 Water animals.
- 9 Wild animals.
- 10 Birds.
- 11 Insects.
- 12 Helpers.
- 13 Means of transport.
- 14 Food (healthy and junk food)
- 15 Indoor and outdoor games.
- 16 Clothes we wear.
- 17 Seasons.
- 18 Festivals.
- 19 Places of worship.
- 20 Our country.
- 21 Living and non living things.
22. Health and hygiene

1. _____ is an outdoor game.
- (a) carrom (b) ludo
(c) basketball (d) chess
2. Ship is a _____ transport
- (a) air (b) water
(c) land (d) none
3. The baby of a horse is called
- (a) colt (b) kitten
(c) puppy (d) lamb
4. A bird which can talk like a human is _____
- (a) penguin (b) eagle
(c) duck (d) parrot
5. The national animal of India is _____
- (a) tiger (b) lion
(c) zebra (d) elephant
6. We smell with our _____
- (a) ears (b) skin
(c) nose (d) hand
7. A sheep lives in a _____
- (a) stable (b) pen
(c) burrow (d) shed
8. Republic day is celebrated on _____
- (a) 15 August (b) 2 October
(c) 25 December (d) 26 January
9. Who sells vegetables _____
- (a) green-grocer (b) cobbler
(c) barber (d) doctor

10. Tick the insect which has beautiful wings
- (a) spider (b) ant
(c) butterfly (d) moth
11. _____ is a festival of lights
- (a) Holi (b) Diwali
(c) Christmas (d) Guruparv
12. What sound does a goat make
- (a) trumpet (b) neigh
(c) chirp (d) bleat
13. Sikhs pray in a _____
- (a) Mosque (b) Church
(c) Temple (d) Gurudwara
14. The smallest bird is _____
- (a) humming bird (b) kiwi
(c) pigeon (d) sparrow
15. What do you call a baby fish
- (a) cub (b) fry
(c) calf (d) chick
16. _____ is a leafy vegetable
- (a) potato (b) brinjal
(c) spinach (d) tomato
17. The largest organ in the human body is
- (a) skin (b) stomach
(c) liver (d) heart
18. The national flower of India is
- (a) pansy (b) rose
(c) lotus (d) lily

19. Who makes furniture for us
- (a) teacher (b) nurse
(c) farmer (d) carpenter
20. Boys wear this
- (a) frock (b) shirt
(c) skirt (d) saree
21. _____ make us healthy and strong
- (a) vegetables (b) pizza
(c) cake (d) cold drinks
22. Woollen clothes are worn in _____ season
- (a) winter (b) summer
(c) rainy (d) autumn
23. Which water animal has eight arms
- (a) eel (b) seahorse
(c) octopus (d) fish
24. _____ is the king of all fruits
- (a) grapes (b) papaya
(c) cherry (d) mango
25. The fastest means of transport among the following is
- (a) cycle (b) car
(c) aeroplane (d) scooter
26. A house made of snow is called
- (a) igloo (b) hut
(c) bungalow (d) apartment
27. Which animal has a hump and is known as the 'SHIP OF THE DESERT'
- (a) lion (b) camel
(c) bear (d) deer

28. Which of the following can be seen in the kitchen
- (a) bed (b) television
(c) gas stove (d) toys
29. Ears help us to
- (a) see (b) feel
(c) taste (d) hear
30. A baby frog is a
- (a) lamb (b) tadpole
(c) calf (d) kitten
31. Which of the following is a living thing
- (a) chair (b) paper
(c) tree (d) clock
32. We trim our nails with a
- (a) scissors (b) toothbrush
(c) comb (d) nail cutter
33. _____ has a sour taste
- (a) lemon (b) sugar
(c) salt (d) cherry
34. What is used to clean a blackboard
- (a) chalk (b) gum
(c) duster (d) eraser
35. When you do something wrong you say
- (a) please (b) sorry
(c) thank you (d) welcome
36. A lizard is a
- (a) bird (b) wild animal
(c) pet (d) reptile

37. On Christmas we celebrate the birthday of
- (a) Jesus Christ (b) Jawaharlal Nehru
(c) Gandhiji (d) none of these
38. I cut your hair . I am a
- (a) carpenter (b) barber
(c) doctor (d) teacher
39. How many toes do we have ?
- (a) 2 (b) 10
(c) 5 (d) 8
40. Find the hidden animal from these letters
F Q T D B G W L K O
- (a) cat (b) fox
(c) owl (d) lion
41. The Sun rises in the
- (a) East (b) West
(c) South (d) North
42. How many sense organs do we have?
- (a) 8 (b) 10
(c) 5 (d) 2
43. We use toothpaste to clean our
- (a) hands (b) eyes
(c) feet (d) teeth
44. How many months are there in a year?
- (a) 7 (b) 12
(c) 6 (d) 24
45. Which game is played with a stick?
- (a) hockey (b) football
(c) volleyball (d) badminton

46. Which animal has a long trunk

(a) giraffe

(b) cow

(c) elephant

(d) horse

47. Which colour is on top of the national flag

(a) green

(b) saffron

(c) blue

(d) white

48. Which is the slowest means of transport

(a) car

(b) motorbike

(c) train

(d) cycle

49. _____ is not used in salad

(a) onion

(b) cucumber

(c) tomato

(d) lady finger

50. September is the _____ month of the year

(a) 6th

(b) 4th

(c) 9th

(d) 12th

51. You call your father's mother as

(a) grandmother

(b) uncle

(c) aunt

(d) grandfather

52. Which insect spreads disease

(a) mosquito

(b) ant

(c) spider

(d) dragonfly

53. Tick the bird that cannot fly

(a) kiwi

(b) pigeon

(c) crow

(d) owl

54. Christmas is celebrated in _____ every year

(a) January

(b) March

(c) July

(d) December

55. A lamb grows to a
- (a) camel (b) duck
(c) sheep (d) zebra
56. Which of the following is not a flower
- (a) dahlia (b) cauliflower
(c) tulip (d) sunflower
57. Which one of the following is a carnivorous animal
- (a) lion (b) deer
(c) goat (d) giraffe
58. What is a lemon
- (a) fruit (b) vegetable
(c) flower (d) seed
59. Muslims pray in a
- (a) Church (b) Temple
(c) Gurudwara (d) Mosque
60. We get heat and light from
- (a) The Sun (b) The Moon
(c) Planet (d) Star

ANSWER KEY

- | | | | | | | |
|-------|-------|-------|-------|-------|-------|-------|
| 1. c | 2. b | 3. a | 4. d | 5. a | 6. c | 7. b |
| 8. d | 9. a | 10. c | 11. b | 12. d | 13. d | 14. a |
| 15. b | 16. c | 17. c | 18. c | 19. d | 20. b | 21. a |
| 22. a | 23. c | 24. d | 25. c | 26. a | 27. b | 28. c |
| 29. d | 30. b | 31. c | 32. d | 33. a | 34. c | 35. b |
| 36. d | 37. a | 38. b | 39. b | 40. c | 41. a | 42. c |
| 43. d | 44. b | 45. a | 46. c | 47. b | 48. d | 49. d |
| 50. c | 51. a | 52. a | 53. a | 54. d | 55. c | 56. b |
| 57. a | 58. a | 59. d | 60. a | | | |

KNEUS SCHOLASTIC APTITUDE TEST CLASS - I

Model Question Paper

Kindly follow the instructions

- Verify your **Roll Number, School Code** and other details before you start answering
- This question paper contains **50 questions in Part A**. Each question is followed by a series of choices or possible answers. Choose any one option which you feel is correct.
- All questions carry **equal marks**. There is **no negative marking for wrong answers**.
- There is a **handwriting test in Part B**. **No evaluation will be made if Part B is unattempted**. Thus Both the sections are to be compulsorily attempted. However part B is considered only when a student secures more than 90% in Part A Objective type
- Try to answer every question. Your test score will be based on the number of questions you answer correctly.
- Please attempt Part B in the space provided in the test booklet or any other specified medium
- **use either blue or black pen for ticking.**
- Tick only one answer for each question. Double answers are scored as wrong answers.
- Keep your answer sheets on a hard surface while answering. Do not fold or crease your answer sheet.
- Do not scribble on the answer book.
- **For rough work** use the plain sheet given **at the end of the book**.
- When you finish your test, if time permits, you may re check your work.

Sample Procedure for answering the question

Who is the Prime Minister of India?

A. Mr. Narendra Modi

B. Dr. Manmohan Singh

C. Mr. Akhilesh Yadav

D. Mrs. Sonia Gandhi

E. None of the above

Correct way of answering

A

B

C

D

E

Wrong way

A

B

C

D

E

PART - A (Objective Type)

Tick (✓) in the appropriate box :

1. Choose the correct rhyming word. Sam likes to play all
(a) Lay (b) Pay
(c) day (d) way
2. The gift is for you. It's not for _____
(a) me (b) my
(c) I (d) mine
3. Tick the odd one out
(a) pond (b) river
(c) well (d) tap
4. The opposite of TOP is
(a) fast (b) behind
(c) bottom (d) up
5. Which word goes with the article 'a'
(a) tree (b) orange
(c) umbrella (d) egg
6. I am a band of seven colours. You can see me after the rain. I am a
(a) light (b) rainbow
(c) sky (d) candle
7. _____ is my uncle.
(a) he (b) she
(c) her (d) his
8. The girl is 'FAT' and the boy is
(a) tall (b) short
(c) sad (d) thin
9. Find the correct pair of LOCK and
(a) door (b) window
(c) hammer (d) key
10. The plural of apple can be made by adding
(a) E (b) Z
(c) S (d) X11.

11. There are 7 _____ in a week.
- (a) minutes (b) days
(c) hours (d) months
12. You eat lunch in the
- (a) afternoon (b) morning
(c) evening (d) night
13. Complete the word with the correct letters 'C _ND_ E.
- (a) A&N (b) O & L
(c) A & L (d) U & A
14. Not fast means
- (a) thin (b) fat
(c) dark (d) slow
15. _____ is a kite.
- (a) those (b) an
(c) this (d) these
16. _____ grandfather is very old
- (a) he (b) his
(c) mine (d) she
17. Fill in the missing numbers. 29 31 33 ___ 37 ___
- (a) 34 & 35 (b) 35 & 39
(c) 34 & 38 (d) 40 & 42
18. Tick the correct missing number. $40 + \underline{\quad} = 70$
- (a) 20 (b) 30
(c) 10 (d) 80
19. Which number is smaller than 96
- (a) 99 (b) 98
(c) 97 (d) 94
20. 2 more than 9 = _____
- (a) 7 (b) 5
(c) 11 (d) 10

21. Which shape is this ?
- (a) square (b) cone
(c) diamond (d) pentagon
22. The smallest three digit number is
- (a) 102 (b) 99
(c) 100 (d) 300
23. Complete the sum . $63 = _ + 61$
- (a) 2 (b) 3
(c) 60 (d) 1
24. _____ is the greatest number among the following
- (a) 125 (b) 50
(c) 200 (d) 210
25. $13 + 12 = \underline{\hspace{2cm}}$
- (a) 22 (b) 25
(c) 20 (d) 10
26. Find the next one : 10, 20, 30, _____
- (a) 50 (b) 80
(c) 60 (d) 40
27. Complete the sequence 2, 4, 6, 8 _____
- (a) 9 (b) 10
(c) 7 (d) 5
28. How do you write seventy two in figures
- (a) 72 (b) 70
(c) 75 (d) 80
29. The sixth month of the year is
- (a) February (b) June
(c) July (d) October
30. 7 birds were sitting on a branch. 3 birds flew away. Now there are _____ birds
- (a) 10 (b) 73
(c) 4 (d) 5

31. What comes after the number 63
- (a) 64 (b) 65
(c) 62 (d) 60
32. 4 tens and 5 ones is
- (a) 54 (b) 9
(c) 45 (d) 42
33. Find the next one : 10, 20, 30, _____
- (a) 50 (b) 80
(c) 60 (d) 40
34. _____ is an outdoor game.
- (a) carrom (b) ludo
(c) basketball (d) chess
35. The national animal of India is
- (a) tiger (b) lion
(c) zebra (d) elephant
36. Republic day is celebrated on
- (a) 15 August (b) 2 October
(c) 25 December (d) 26 January
37. Sikhs pray in a
- (a) Mosque (b) Church
(c) Temple (d) Gurudwara
38. The national flower of India is
- (a) pansy (b) rose
(c) lotus (d) lily
39. Woollen clothes are worn in
- (a) winter (b) summer
(c) rainy (d) autumn
40. A baby frog is a
- (a) lamb (b) tadpole
(c) calf (d) kitten

41. A lizard is a
- (a) bird (b) wild animal
(c) pet (d) reptile
42. How many sense organs do we have?
- (a) 8 (b) 10
(c) 5 (d) 2
43. _____ is not used in salad
- (a) onion (b) cucumber
(c) tomato (d) lady finger
44. Tick the bird that cannot fly
- (a) kiwi (b) pigeon
(c) crow (d) owl
45. Muslims pray in a
- (a) church (b) temple
(c) gurudwara (d) mosque
46. _____ is a festival of lights
- (a) Holi (b) Diwali
(c) Christmas (d) Guruparv
47. What sound does a goat makes
- (a) trumpet (b) neigh
(c) chirp (d) bleat
48. A house made of snow is called
- (a) igloo (b) hut
(c) bungalow (d) apartment
49. How many toes do we have ?
- (a) 2 (b) 10
(c) 5 (d) 8
50. Which one of the following is a carnivorous animal
- (a) lion (b) deer
(c) goat (d) giraffe

Please use this space for rough work

Rough Work

